

**REACH FOR THE STARS**

Please fill in the following accurately:

School name:

Team color:

Team number:


**Part 1 (Total 50 pts)**

For each of the following images, give the following information: (Total points : 32)

- i. The name of the deep-space object.
- ii. The portion of the electromagnetic spectrum used to take the image. (gamma ray, x-ray, etc.)
- iii. The approximate distance from earth, in light years.
- iv. The constellation in which the object can be found



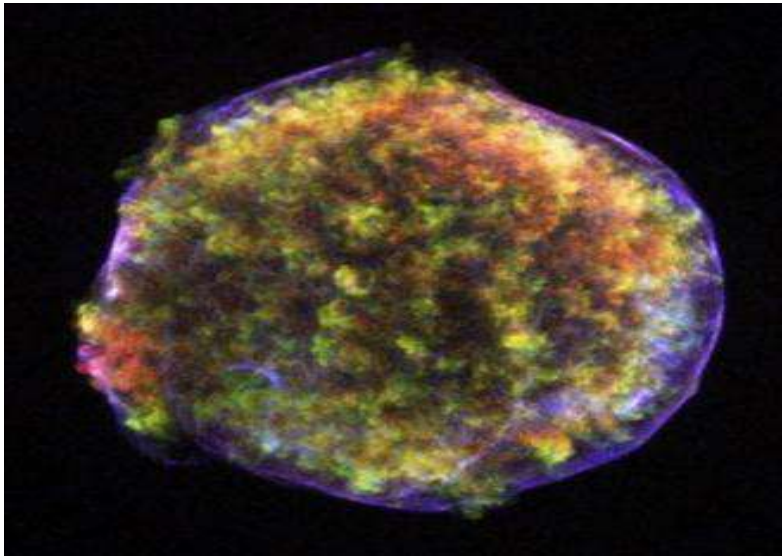
1.

2.




3.

4.




5.




6.




7.




8.


9. Refer to the following star chart for all questions in this section. (10 points total; 1 pt each question)

**Constellations:**

Give constellation names. Refer to the red capital letters in the star chart.

<b>A</b>	
<b>B</b>	
<b>C</b>	
<b>D</b>	
<b>E</b>	
<b>F</b>	

**Stars:**

Give star names. Refer to the stars marked as red circles labeled with lowercase letters on the star chart

<b>a</b>	
<b>b</b>	
<b>c</b>	
<b>d</b>	

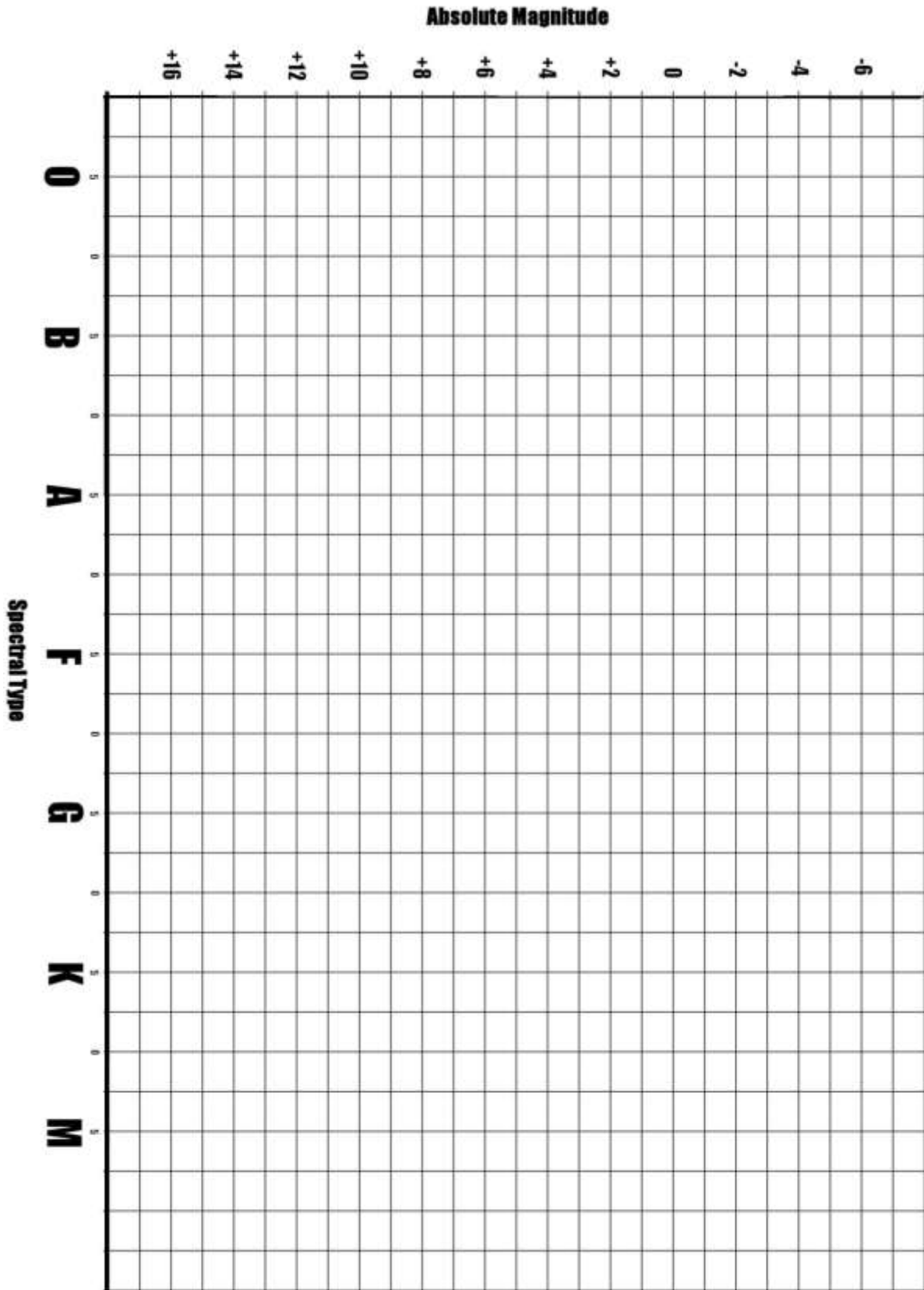




**9. Evolutionary stage (Total 8 pts)**

Name the evolutionary stage for each star. Then, there is a blank H-R diagram on the next page. Plot the stars given on the chart. Clearly label each star. (1 point each to a total of 4 pts for first part of question; plotting of stars on HR is additional 1 pt each to a maximum of 4 pts)

<b>Star</b>	<b>Absolute Magnitude</b>	<b>Spectral Type</b>	<b>Evolutionary Stage</b>
Spica	-3.55 MV	B1	
Aldebaran	-0.63 MV	K5	
Deneb	-7.0 MV	A2	
Proxima Centauri	15.49 MV	M5.5	





**Part II** (total pts: 50 pts)

1. What is the Sun's spectral class? (1 pt) \_\_\_\_\_
2. What is the Sun's absolute magnitude? (1 pt) \_\_\_\_\_
3. At what distance are apparent and absolute magnitude the same? (1 pt) \_\_\_\_\_
4. What do the H and R stand for in "H-R diagram"? (2 pts) \_\_\_\_\_  
\_\_\_\_\_
5. What does the H\_R diagram plot? (2 pt)  
\_\_\_\_\_
6. Antares emits a large portion of its energy in what non-visible wavelength? (1 pt)  
\_\_\_\_\_
7. White dwarfs can go supernova when they approach a certain mass. What is the name of this "critical mass"? (1 pt) \_\_\_\_\_
8. What type of supernova results from a white dwarf gaining too much mass and exploding? (1 pt)  
\_\_\_\_\_
9. Vega, Altair, and Regulus are flattened at the poles and bulging at the equator. What are the reasons for this? (2 pts) \_\_\_\_\_
10. Which star, excluding the sun, is the closest to Earth? How far is it (to .1 light years)? (2 pts)  
\_\_\_\_\_
11. What is the term for stars that don't have enough mass to start nuclear fusion? (1 pt)  
\_\_\_\_\_
12. What are the evolutionary stages of a Sun-sized star? (4 pts)
  - a. \_\_\_\_\_
  - b. \_\_\_\_\_
  - c. Red giant

d. \_\_\_\_\_

e. \_\_\_\_\_

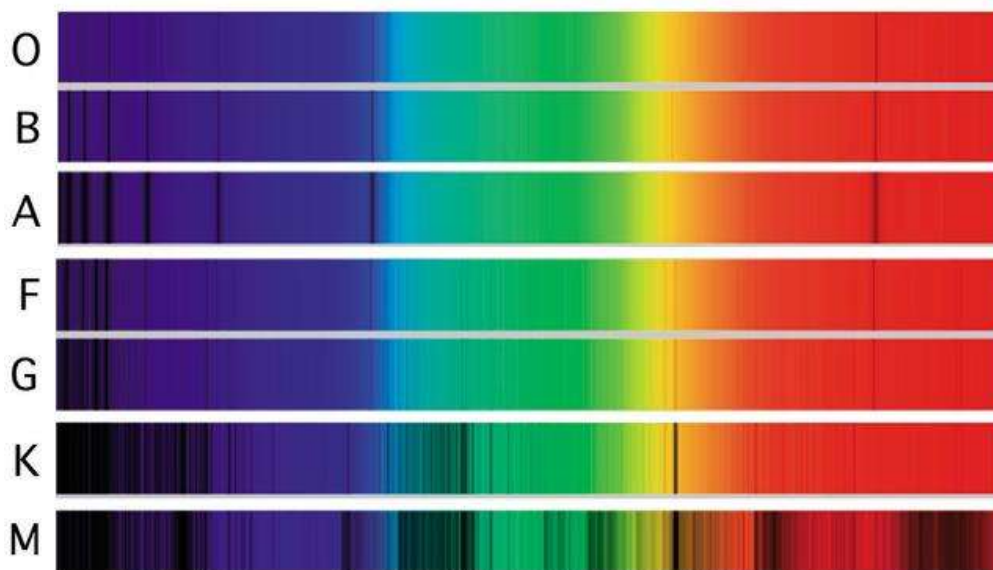
13. For the sake of convenience, astronomers have divided the sky into 88 constellations. In which of these does the current Polar star, Polaris, lie? (1pt)

---

14. What is the general relationship between the mass of a star and its lifespan? (1 pt)

---

---



The following questions refer to the spectral sequence shown above. For questions 15 to 19 below, list the spectral type which is best described by the statement. (1 pt for each)

15. The sun is this spectral class. \_\_\_\_\_

16. This spectral class contains the hottest stars. \_\_\_\_\_

17. This spectral class contains the coolest stars. \_\_\_\_\_

18. Stars in this spectral class emit most of their energy in the ultraviolet \_\_\_\_\_

19. Stars in this spectral class emit most of their energy in the infrared \_\_\_\_\_

20. Which star is the brightest in the nighttime sky? (1 pt)

\_\_\_\_\_

21. Stars in clusters are bound together by what? (1 pt)

\_\_\_\_\_

22. What is Kepler's third law? (1 pt)

\_\_\_\_\_

23. What are the stellar luminosity classes? (5 pts)

\_\_\_\_\_  
\_\_\_\_\_  
\_\_\_\_\_  
\_\_\_\_\_  
\_\_\_\_\_

24. What are the 3 types of binary star systems? (3 pts)

\_\_\_\_\_  
\_\_\_\_\_  
\_\_\_\_\_

25. What are the two most important properties of a telescope and explain each term. (4 pts)

\_\_\_\_\_  
\_\_\_\_\_  
\_\_\_\_\_  
\_\_\_\_\_

26. What is luminosity? (1 pt)

\_\_\_\_\_

27. What are the 3 main types of galaxies? (3 pts)

---

---

---

28. What is pulsar and what is it composed of ? (2 pts)

---

---

29. What is the difference between absolute and apparent magnitude (1pt)

---

---

30. Explain following terms (2 pts)

- a. Astronomical unit
- b. Light year

---

---