

# CHEMISTRY LAB

## INVITATIONAL EXAM

PATRICK O'NEILL, DEC 2009

[peoneill@indiana.edu](mailto:peoneill@indiana.edu)

SCHOOL NAME:

ANSWER KEY

STUDENT NAMES:

Patrick O'Neill

TEAM NO.:

~~X~~

pg 1 = 25 pts

pg 2 = 20 pts

pg 3 = 15 pts

pg 4 = 20 pts

pg 5 = 20 pts

+ up to 5 BONUS for sig figs

= 105/100

### I. BALANCING REACTIONS

= 10

2pts each; NO partial credit

Balance the following reactions:

- $2 \text{H}_2(\text{g}) + \text{O}_2(\text{g}) \rightarrow 2 \text{H}_2\text{O}(\text{l})$
- $2 \text{HCl}(\text{aq}) + \text{Ba}(\text{OH})_2(\text{aq}) \rightarrow 2 \text{H}_2\text{O}(\text{l}) + \text{BaCl}_2(\text{aq})$
- $3 \text{Pb}(\text{NO}_3)_2(\text{aq}) + 2 \text{FeCl}_3(\text{aq}) \rightarrow 3 \text{PbCl}_2(\text{s}) + 2 \text{Fe}(\text{NO}_3)_3(\text{aq})$
- $\text{C}_3\text{H}_8(\text{g}) + 5 \text{O}_2(\text{g}) \rightarrow 3 \text{CO}_2(\text{g}) + 4 \text{H}_2\text{O}(\text{l})$
- $2 \text{HC}_2\text{H}_3\text{O}_2(\text{aq}) + \text{Na}_2\text{CO}_3(\text{aq}) \rightarrow \text{H}_2\text{O}(\text{l}) + \text{CO}_2(\text{g}) + 2 \text{NaC}_2\text{H}_3\text{O}_2(\text{aq})$

### II. NOMENCLATURE

= 10

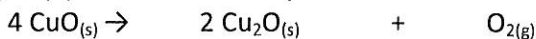
1pt each; NO partial credit

Complete the following table:

Chemical Name	Chemical Formula
Sodium Chloride	NaCl
Lithium Hydride	LiH
Calcium Peroxide	CaO <sub>2</sub>
Ammonium Nitrate	NH <sub>4</sub> NO <sub>3</sub>
Hypochlorous Acid	HClO
Magnesium Fluoride	MgF <sub>2</sub>
Carbon Dioxide	CO <sub>2</sub>
Copper (I) Oxide	Cu <sub>2</sub> O
Tetraphosphorus Decoxide	P <sub>4</sub> O <sub>10</sub>
Sulfurous Acid	H <sub>2</sub> SO <sub>3</sub>

### III. STOICHIOMETRY = 5 on THIS PAGE

5) Copper (II) Oxide will decompose when it is heated strongly.



How many grams of oxygen can be obtained from 2.64 g CuO(s)?

$$63.5 + 16.0 = 79.5 \text{ g/mol } 0.5 \text{ pt}$$

$$16.0 \times 2 = 32 \text{ g/mol } 0.5 \text{ pt}$$

if math is wrong but work is neat & organized, look for these steps worth half a point partial credit each

$$2.64 \text{ g CuO}(\text{s}) \times \frac{1 \text{ mol CuO}(\text{s})}{79.5 \text{ g CuO}(\text{s})} \times \frac{1 \text{ mol O}_2(\text{g})}{4 \text{ mol CuO}(\text{s})} \times \frac{32.0 \text{ g O}_2(\text{g})}{1 \text{ mol O}_2(\text{g})} = 0.266 \text{ g O}_2(\text{g})$$


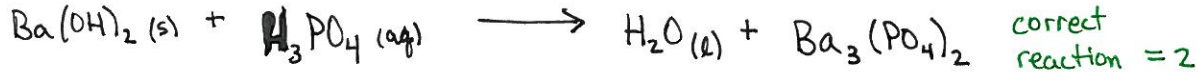
+ 4pts  $\downarrow$

(\*) + 1pt - label w/ "g O<sub>2</sub>"

→ 10 possible

★ If all 3 stoichiometry answers are present (even if wrong) and one all presented with exactly 3 sig figs, award 7.2 extra credit

6) Barium Hydroxide will react with phosphoric acid in an acid-base reaction. Predict the products, then identify how many grams of each product is produced if 1 mol of Ba(OH)<sub>2(s)</sub> is reacted in an excess of H<sub>3</sub>PO<sub>4(aq)</sub>.



1 mol Ba(OH)<sub>2</sub> (s) ×  $\frac{6 \text{ mol H}_2\text{O} (l)}{3 \text{ mol Ba(OH)}_2}$  ×  $\frac{18.0 \text{ g H}_2\text{O} (l)}{1 \text{ mol H}_2\text{O} (l)}$  = 36.0 g H<sub>2</sub>O ★  
 answer = 2, label = 1

1 mol Ba(OH)<sub>2</sub> (s) ×  $\frac{1 \text{ mol Ba}_3(\text{PO}_4)_2}{3 \text{ mol Ba(OH)}_2}$  ×  $\frac{601.9 \text{ g Ba}_3(\text{PO}_4)_2}{1 \text{ mol Ba}_3(\text{PO}_4)_2}$  = 201.9 g Ba<sub>3</sub>(PO<sub>4</sub>)<sub>2</sub> ★  
 answer = 2 label = 1

IV. CONCENTRATION AND DILUTION

→ = 10 possible

1) What is the molarity of 1.0 mol NaCl dissolved in 1.0L of H<sub>2</sub>O?

Molarity =  $\frac{\text{mol}}{\text{L}} = \frac{1.0 \text{ mol NaCl (aq)}}{1.0 \text{ L H}_2\text{O} (l)}$  = 1.0M + 2

2) What is the molarity of 100.g NaCl dissolved in 800mL H<sub>2</sub>O?

100.g NaCl ×  $\frac{\text{mol NaCl}}{58.5 \text{ g NaCl}} = 1.71 \text{ mol NaCl}$  /  $\frac{\text{H}_2\text{O: } 800 \text{ mL} \rightarrow .800 \text{ L}}{\text{M} = \frac{\text{mol}}{\text{L}} = \frac{1.71 \text{ mol NaCl (aq)}}{.800 \text{ L H}_2\text{O} (l)} = \underline{2.14 \text{ M}} + 2$

3) What is the molality of 100.g HC<sub>2</sub>H<sub>3</sub>O<sub>2</sub> added to 500. mL of water?

100g HC<sub>2</sub>H<sub>3</sub>O<sub>2</sub> ×  $\frac{\text{mol HC}_2\text{H}_3\text{O}_2}{60.0 \text{ g HC}_2\text{H}_3\text{O}_2} = 1.67 \text{ mol HC}_2\text{H}_3\text{O}_2$  /  $\frac{\text{H}_2\text{O } 500 \text{ mL} = 500. \text{ g} = .500 \text{ kg}}{\text{m} = \frac{\text{mol solute}}{\text{kg solvent}} = \frac{1.67 \text{ mol HC}_2\text{H}_3\text{O}_2 (aq)}{.500 \text{ kg H}_2\text{O} (l)} = \underline{3.34 \text{ m}} + 3$

4) If I begin with 3.0L of 5.0M NaCl, how much water must I add to obtain 2.0M NaCl?

C<sub>1</sub>V<sub>1</sub> = C<sub>2</sub>V<sub>2</sub> (also written M<sub>1</sub>V<sub>1</sub> = M<sub>2</sub>V<sub>2</sub> or M<sub>i</sub>V<sub>i</sub> = M<sub>f</sub>V<sub>f</sub>)  
 (5.0M)(3.0L) = (2.0M)(V<sub>2</sub>)

V<sub>2</sub> = 7.5L OR that 4.5L must be ADDED to properly dilute. (3pts total)

IF SIG FIGS ARE PROPERLY USED ON ALL FOUR ANSWERS (2,3,3,2) AWARDED 1 bonus point

#### IV. SOLUTIONS AND COLLIGATIVE PROPERTIES

CIRCLE THE CORRECT ANSWER

Multiple choice = 2pts each = 10 TOTAL

1) Describes the equilibrium point at which rate of dissolution is equal to rate of precipitation (usually in mol/kg)

- A. Molality  
 B. Normality  
 C. Miscibility  
 D. Solubility

2) The scattering of light particles caused by colloids that tends to reflect blue better than other colors

- A. Tyndall Effect  
 B. Cairn Principle  
 C. Crawford Phenomenon  
 D. Holdert's Diffraction

3) Used to measure the light absorbance of solutions

- A. Spectrophotometer  
 B. Scanning Electron Microscope  
 C. Kinetoscope  
 D. Chromatographer

4) A solution with a much LOWER concentration than that of solution within a semi-permeable membrane (such as a cell)

- A. Hypotonic  
 B. Supertonic  
 C. Hypertonic  
 D. Isotonic

5) The amount of light absorbed by a substance at a given wavelength is directly proportional to its concentration in a solution.

- A. Crawford Phenomenon  
 B. Beer's Law  
 C. Raoult's Law  
 D. Henry's Law

worth 5 pts

6) How many grams of  $(\text{NH}_4)_3\text{PO}_4$  need to be added to 500. mL of  $\text{H}_2\text{O}$  so that the freezing point of the solution is lowered to  $-8.3^\circ\text{C}$ ? Assume that the ammonium phosphate completely dissociates. ( $K_f = 1.86^\circ\text{C}/m$ )

$$\Delta T = K_f m i$$

$\downarrow$                        $\downarrow$                        $\downarrow$   
 $8.3^\circ\text{C} = (1.86^\circ\text{C}/m) \times m \times 4$

*+1 partial...  
 +0.5 if w/o i*

$$(\text{NH}_4)_3\text{PO}_4$$

$14 \times 3 + 4 \times 3 + 31 + 4 \times 16 = 149.0 \text{ g/mol}$

$$m = 1.12 \xrightarrow{+1 \text{ partial}} \frac{1.12 \text{ mol } (\text{NH}_4)_3\text{PO}_4}{\text{kg H}_2\text{O}} \times 0.500 \text{ kg H}_2\text{O} \times \frac{149 \text{ g } (\text{NH}_4)_3\text{PO}_4}{\text{mol } (\text{NH}_4)_3\text{PO}_4} = 83 \text{ g } (\text{NH}_4)_3\text{PO}_4$$

3 ★ The answer of 370 g may be common as students forget the Vanit Hoff Factor (i).

This answer is worth 2.5/5 and IS eligible for the sig fig bonus pt.

+5 if correct  
 +1 bonus if correct w/ 2 sig figs

pg subtotal / 15

worth 5 pts

7) What is the osmotic pressure of a .50M solution of  $\text{Ca}(\text{NO}_3)_2$  at 25 °C in water? Assume  $i=3.0$ .

HINT:  $R = .08206 \text{ L atm/mol K}$

$\Pi = MRT$   $i \rightarrow +2$  partial;  $+1.5$  if no  $i$

$\Pi = (.50 \frac{\text{mol}}{\text{L}}) (.08206 \frac{\text{L} \cdot \text{ATM}}{\text{MOL} \cdot \text{K}}) (298\text{K}) (3.0)$

$\Pi = 3.7 \text{ ATM}$   $+5$  if correct,  $(+1 \text{ bonus})$  if 2 sig figs

worth 5 pts

8) Given that you assumed  $i = 3.0$ , would you expect the actual osmotic pressure to be higher or lower than your calculation? Why?

$\Pi = MRT(i)$  ← increases in  $i$  increase  $\Pi$

The actual osmotic pressure will be lower<sup>+2</sup> because while the ideal Van't Hoff factor

for  $\text{Ca}(\text{NO}_3)_2(aq) = 3.0$  it doesn't actually act as three totally independent ions in solution. Rather, the  $\text{Ca}^{2+}$  ions do weakly associate with the  $\text{NO}_3^-$  ions.  $+3$

The actual Van't Hoff Factor is probably 2.1-2.7 ish.

### V. CHEMICAL KINETICS

CIRCLE THE CORRECT ANSWER

MULTIPLE CHOICE = 2 pts each = 10 pts total

1) When a catalyst is added to a system at equilibrium, a decrease occurs in the

A) activation energy

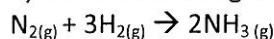
B) heat of reaction

C) potential energy of the reactants

D) rate constant

E) potential energy of the products

2) For the following reaction the rate of reaction can be properly stated as:



A)  $d[\text{N}_2]/dt$

B)  $d[\text{H}_2]/dt$

C)  $d[\text{NH}_3]/dt$

D)  $3 d[\text{H}_2]/dt$

E)  $2d[\text{NH}_3]/dt$

3) Using the reaction from problem #2, which is true?

A)  $d[\text{N}_2]/dt = 3 d[\text{H}_2]/dt$

B)  $-d[\text{N}_2]/dt = +1/3 d[\text{H}_2]/dt$

C)  $-2/3 d[\text{H}_2]/dt = +d[\text{NH}_3]/dt$

D)  $-3 d[\text{H}_2]/dt = +2 d[\text{NH}_3]/dt$

E)  $2/3 d[\text{H}_2]/dt = +d[\text{NH}_3]/dt$

4) What is a heterogeneous catalyst?

A) a heat sensitive catalyst

B) a catalyst in a different phase than the reactants

C) a pH dependent catalyst

D) a catalyst in the same phase as the reactants

5) Reaction speed increases when the surface area of a \_\_\_\_\_ reactant increases.

A) solid

B) liquid

C) gas

D) solid or liquid

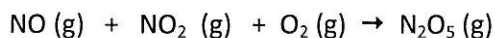
E) solid or gas

F) gas or liquid

pg subtotal  
20

6) Given the following experimental data, find the rate law and the rate constant for the reaction:

out of 8



Run	[NO] <sub>o</sub> , M	[NO <sub>2</sub> ] <sub>o</sub> , M	[O <sub>2</sub> ] <sub>o</sub> , M	Initial Rate, Ms <sup>-1</sup>
1	0.10 M	0.10 M	0.10 M	2.1 × 10 <sup>-2</sup>
2	0.20 M	0.10 M	0.10 M	4.2 × 10 <sup>-2</sup>
3	0.20 M	0.30 M	0.20 M	1.26 × 10 <sup>-1</sup>
4	0.10 M	0.10 M	0.20 M	2.1 × 10 <sup>-2</sup>

$$r = k [\text{NO}]^2 [\text{NO}_2] \quad \rightarrow \quad k = \frac{r}{[\text{NO}]^2 [\text{NO}_2]}$$

value for k...

$$k = \frac{2.1 \times 10^{-2}}{[.1][.1]} = \underline{\underline{2.1}} \quad \text{+2 partial}$$

units for k...

$$k = \frac{\text{mol/s}}{\text{mol}^3/\text{L}} = \underline{\underline{\frac{\text{L}}{\text{mol} \cdot \text{s}}}} \quad \text{+2 partial}$$

$$k = 2.1 \frac{\text{L}}{\text{mol} \cdot \text{s}} \quad \underline{\underline{+5}}$$

out of 2

7) The half-life of a radioisotope is found to be 30 minutes. If the decay follows first order kinetics, what percentage of isotope will remain after 2.00 hours?

$$2 \text{ hrs} = 4 \text{ half lives}$$

$$\frac{1}{2^4} = \frac{1}{16} = \underline{\underline{6.25\%}} \quad \underline{\underline{+2}}$$

out of 10

8) The mechanism of a reaction is shown below.

- What is the overall reaction?
- Which compounds are intermediates?
- Predict the rate law based on this mechanism.
- What is the overall order of the reaction?

